

2018 national curriculum tests

Key stage 1

MATHEMATICS

Modified large print

Paper 2: reasoning

First name

Middle name

Last name

Note for marking:

This paper should be marked using the standard mark schemes for KS1 mathematics: Paper 2. Please also refer to the Key stage 1 mathematics amendments to mark schemes – MLP document for questions that have been modified or replaced.

BLANK PAGE

In this booklet you will read the names of six children.

They are called:

Amy

Ajay

Sam

Ben

Sita

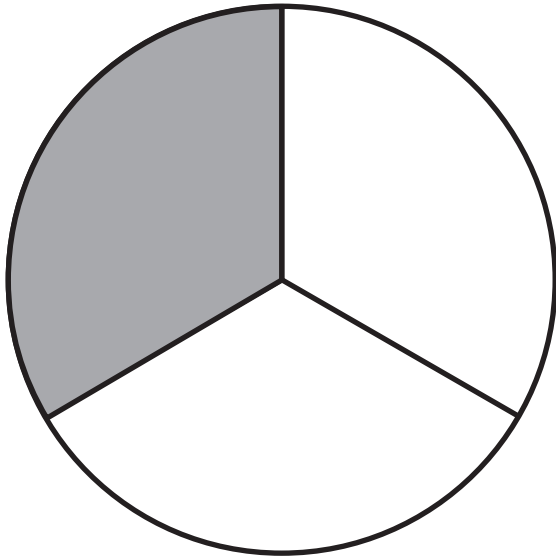
Kemi

Practice question

1. 20 2 2

2.

3.



$$\frac{1}{2}$$

$$\frac{1}{4}$$

$$\frac{1}{3}$$

$$\frac{3}{4}$$

4. **13**

20 marbles

_____ marbles

5. × = **25**

6. Look at the four lines below.

They are labelled **P Q R** and **S**

P _____

Q _____

R _____

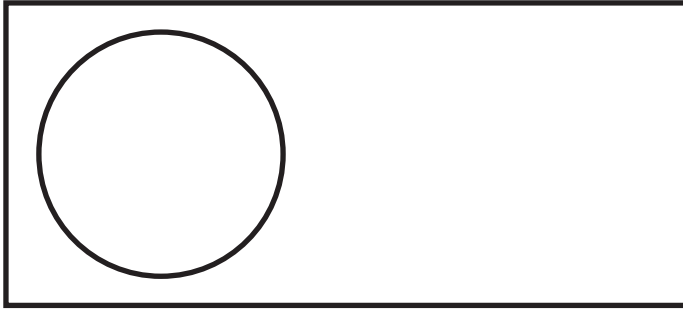
S _____

Write the letters of the lines in order of their length from longest to shortest.

One is done for you.

_____ **S** _____
longest shortest

7.



Tick the names of the two shapes in the picture above.

Tick **two**.

triangle

square

rectangle

circle

hexagon

8. Look at the shape below.

It is made from four rectangles.



Shade $\frac{3}{4}$ of this shape.

9. Look at the diagram below.



The diagram shows some shaded circles and some unshaded circles.

Tick the third shaded circle.

10. Sita has ten bags.

Sita puts 10 balls in each bag.

How many balls are in the bags altogether?

_____ balls

11. Kemi goes to four clubs each week.

The times they last are listed below.

Swimming 45 minutes

Art 2 hours

Music 75 minutes

Drama 1 hour

Which club lasts the longest?

12. Ajay's plant was **11** centimetres tall.

It grows **7** centimetres taller.

How tall is the plant now?

_____ cm

13. Amy uses **3** tens and **4** ones to make a number.

Look at the four numbers below.

43




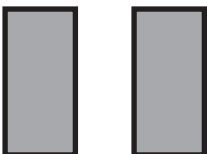
30

34

41

Tick the number Amy makes.

14. Look at the chart below. It shows the number of stickers four children have.

Kemi	
Amy	
Ben	
Sam	

Kemi has more stickers than Sam.

How many more?

15. A classroom has **6** tables.

Each table has **5** children sitting at it.

Complete the number sentence below to show how many children there are altogether.

$$\square \times \square = \square \text{ children}$$


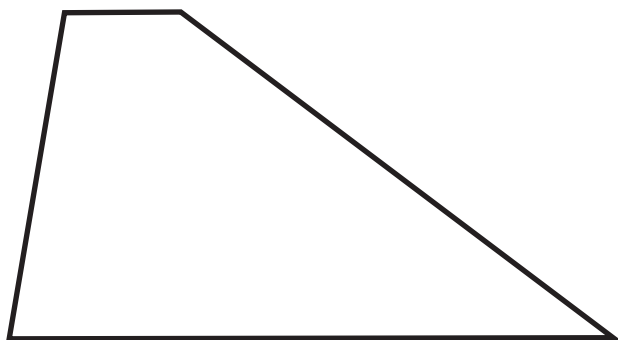

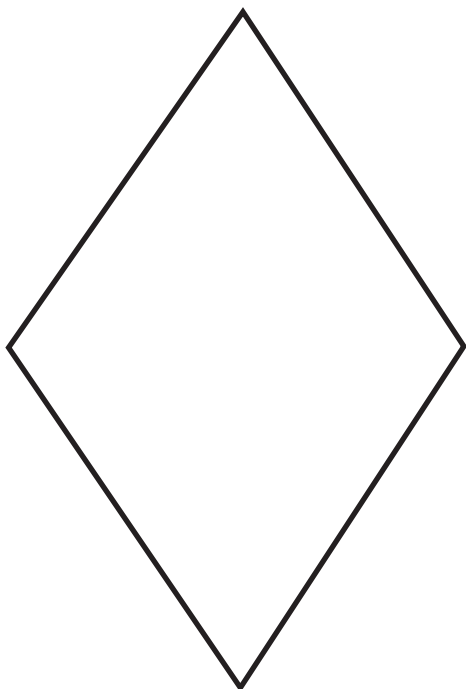
16. A shopkeeper has **20** fish and **5** fish bowls.

He puts the same number of fish in each bowl.

How many fish go in each bowl?

_____ fish

17. Look at the four shapes below.



Tick the shape that does **not** have a line of symmetry.

18. Ajay has **20p** in **2p** coins.

How many **2p** coins does Ajay have?

_____ coins

19.

5

40

8

Use only these numbers to make a different number sentence each time.

One is done for you.

5

×

8

=

40

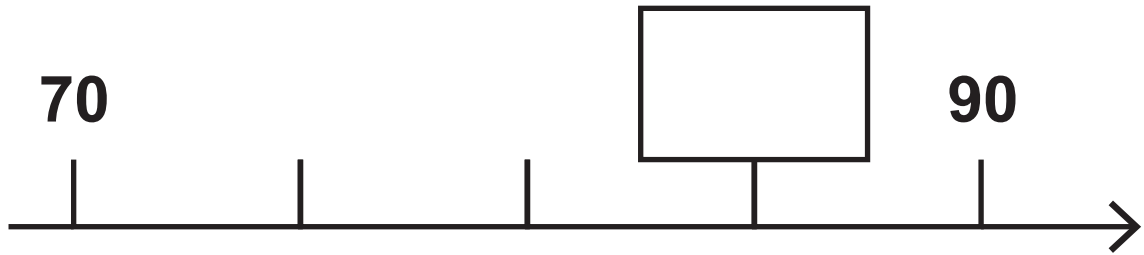
×

=

÷

=

20. Look at part of a number line below.




Write the correct number in the box.

21. At an airport, one plane lands every minute.

How many planes land in **1** hour?

_____ planes

22. Look at the six number cards below.



Use four of these number cards to complete the two number sentences below.

$$\square + \square = \square 60$$

$$\square + \square = \square 60$$

23. Look at the list of six coins below.

5p 10p 10p 10p 20p 20p

Sam has 55p

Ben has 10p less than Sam.

Write the coins that Ben has.

Choose your answer from the list of coins.

24. Biscuits cost 20p each.

Cakes cost 25p each.

Sam buys 3 biscuits and 1 cake.

How much does Sam spend altogether?

Show your working.

_____ p

25. Amy buys one pear for 35p

She pays with a 50p coin.

How much change does Amy get?

_____ p

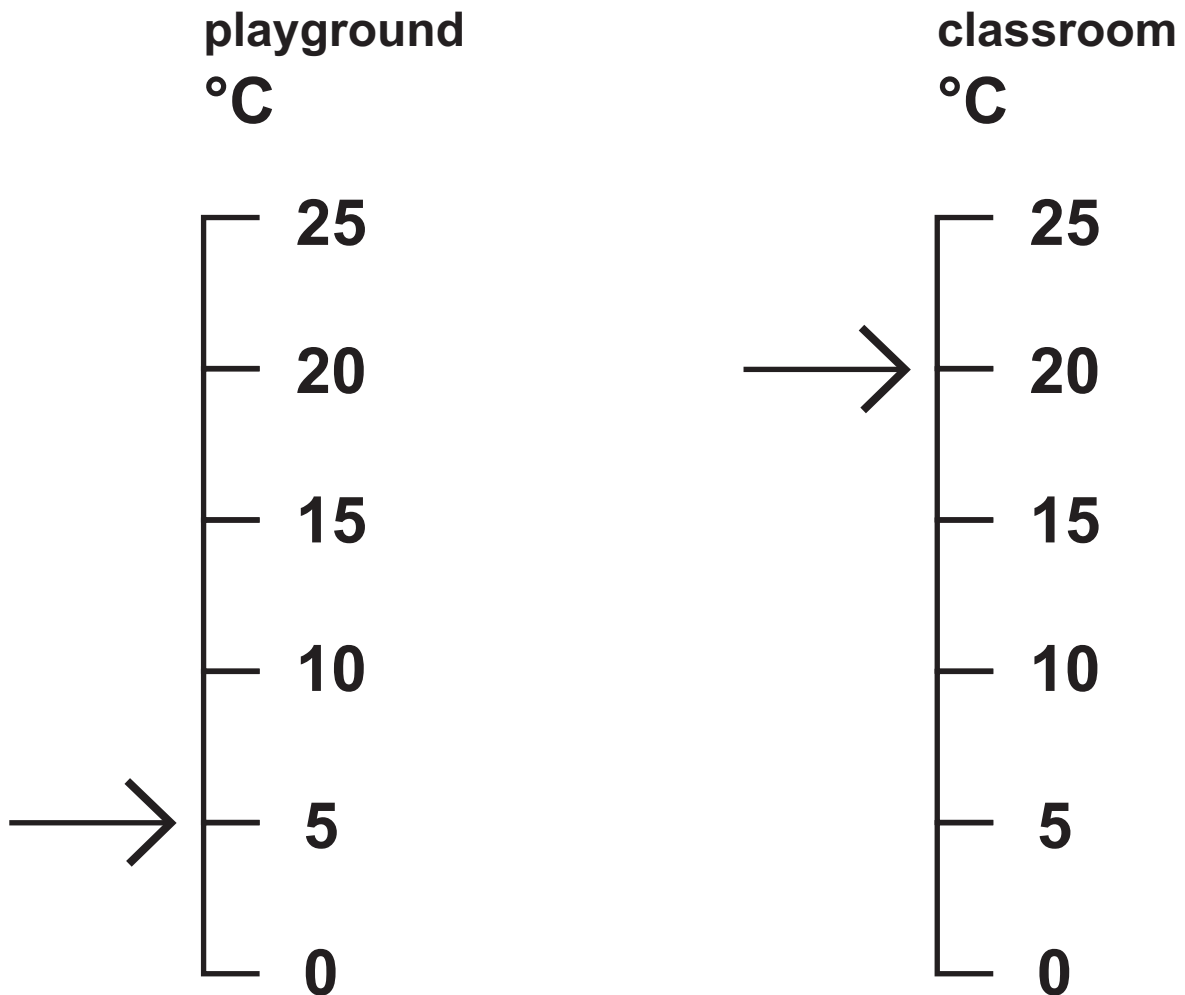
26. Look at the number pattern below.

5 10 15 — 25 30 —

Write the two missing numbers.

27. Look at the two scales below.

They measure temperature.



The temperature on the playground is lower than the temperature in the classroom.

How much lower?

_____ °C

28. Write the **same** number in both boxes to make the sum below correct.

$$\square + \square = 26$$

29. a) Look at the line below.

How long is the line?

Use your ruler.



_____ cm

b) Look at the line below.

How long is the line?

Use your ruler.



_____ **cm**

30. Ben has 7 bags of grapes.

Each bag has 10 grapes.

Ben gives 25 grapes to his friends.

How many grapes does he have left?

Show your working.

_____ grapes

31. Write the missing number in the box below.

$$13 + 6 = 10 + \square$$

32. Write two numbers in the boxes that are greater than **20** to make the subtraction below correct.

$$\square - \square = 2$$

End of test

BLANK PAGE

BLANK PAGE

Total marks	
--------------------	--



Standards
& Testing
Agency

2018 key stage 1 mathematics

Paper 2: reasoning

Print version product code: STA/18/7965/MLp ISBN: 978-1-78644-663-3

Electronic PDF version product code: STA/18/7965/MLe ISBN: 978-1-78644-785-2

For more copies

Additional printed copies of this modified large print test paper can be ordered by contacting the STA's modified test agency on 0300 303 3019.

© Crown copyright 2018

Re-use of Crown copyright in test materials

Subject to the exceptions listed below, these test materials are Crown copyright and you may re-use them (not including logos) free of charge in any format or medium in accordance with the terms of the Open Government Licence v3.0 which can be found on the National Archives website and accessed via the following link: www.nationalarchives.gov.uk/doc/open-government-licence. When you use this information under the Open Government Licence v3.0, you should include the following attribution: 'Contains material developed by the Standards and Testing Agency for 2018 national curriculum assessments and licensed under Open Government Licence v3.0' and where possible provide a link to the licence.



Exceptions – third-party copyright content in test materials

You must obtain permission from the relevant copyright owners, as listed in the '2018 key stage 1 tests copyright report', for re-use of any third-party copyright content which we have identified in the test materials, as listed below. Alternatively, you should remove the unlicensed third-party copyright content and/or replace it with appropriately licensed material.

Third-party content

These materials contain no third-party copyright content.

If you have any queries regarding these test materials, contact the national curriculum assessments helpline on 0300 303 3013 or email assessments@education.gov.uk.